



THE PRIME EXAMINATIONS 2022

P.7 PRE - PLE TRIAL SET III

SOCIAL STUDIES AND RELIGIOUS EDUCATION (Abridged Curriculum)

Time allowed 2 hours 15 minutes

INDEX NO:

Random No.

Personal No.



Top up your
classwork with
Prime Learn

www.prime-learn.com

Candidate's Name:

Candidate's Signature:

School Random No.

District ID:

READ THE FOLLOWING INSTRUCTIONS CAREFULLY

- The paper is made up of two sections: A and B.
- Do not write your school or district name anywhere on this paper.
- This paper has two sections: A and B. Section A has 40 questions and section B has 15 questions. The paper has 7 printed pages.
- Answer all questions. All answers to both sections A and B must be written in the spaces provided.
- All answers must be written using a blue or black ball point pen or ink. Any work written in pencil other than graphs and diagrams will not be marked.
- Unnecessary changes in your work and handwriting that cannot easily be read may lead to loss of marks.
- Do not fill anything in the table indicated "For Examiners' use only", and those boxes inside the question paper.

FOR EXAMINERS' USE ONLY

QUESTION NUMBER	MARKS ATTAINED	INITIALS
1 - 10		
11 - 20		
21 - 30		
31 - 40		
41 - 43		
44 - 46		
47 - 49		
50 - 52		
52 - 55		
53 - 55		

APPROVED:

Consultant

Social Studies Department (PEC)

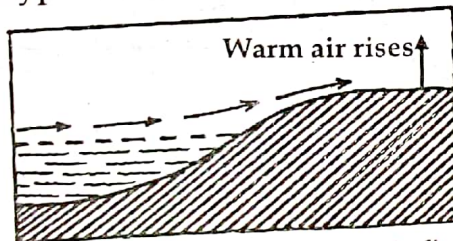
THE PRIME: SCHEMING FRAMEWORKS, PUPILS' WORKBOOKS, LESSON COURSE BOOKS, HOLIDAY PACKAGES, LEARNING GAMES AND MORE...

Turn Over

Organised by: PRIME EDUCATIONAL CONSULT @2022 Kampala

Section A. (40 Marks)

1. Name the map element which helps one to know what a map is all about.
2. Mention any one tribe in Uganda which practices **circumcision** as its culture.
3. State any one way the discovery of farming helped to improve early man's life.
4. How is the mining of **phosphates** useful to farmers in East Africa?
5. Name the largest inland fishing ground in East Africa.
6. State one way the Royal Geographical Society (RGS) was helpful to the European explorers who came to Africa.
7. Mention any one factor that has promoted dairy farming in the Kenya highlands.
8. Give any one social contribution of the **Bachwezi** in East Africa.
9. Why are minerals regarded as non-renewable resources?
10. Name the type of breeze shown below.



11. How do the Mozambique currents influence the climate of Africa?
12. State the importance of a wind vane at a weather station.
13. How is Nigeria similar to Ghana in terms of geographical location?

14. Why is Dr. Louis Leakey historically remembered in East Africa?

15. Give the meaning of population structure.

16. Name any one tribe in East Africa which participated in Long Distance Trade.

17. State any one advantage of using railway transport over road transport.

18. Write down any one symbol of the East African Community.

19. Why did most Bantu tribes in Uganda settle in the interlacustrine region?

20. How were the dhows useful to the early foreign traders who came to East Africa from Arabia?

21. Compare Mount Rwenzori and Mount Usambara in terms of their formation. ☐

22. Which game park in Uganda is famous for ostriches?

23. Why did Egypt try to colonise Uganda?

24. What was the major cause of the Lamogi rebellion in Acholi sub-region?

25. State one reason why the Portuguese explorers were interested in finding the sea route to India.

26. How did Henry Sylvester Williams promote the spirit of nationalism among the Africans?

27. Which European country colonised most West African states?

28. Give one way a deficit budget hinders economic development of a family.
29. Why did the Trans-Saharan traders move in caravans across Sahara desert?
30. Give the meaning of the term climate.
31. How was the western rift valley useful to the colonialists during the evolution of Uganda's boundaries?
32. Write down any one month when the sun is overhead the equator.
33. State any one reason why the Niger delta is densely populated.
34. Which major cash crop is grown in Kericho district in Kenya?
35. State any one reason why television communication is not common in most rural areas of Uganda.

For questions 36 to 40, answer Either Christianity Or Islamic questions but not both on a number.

36. Either: Why is Judas Iscariot blamed for Jesus' death?
Or: Why did Prophet Muhammad go to Taif?
37. Either: Which religion existed in Africa before the introduction of foreign religions?
Or: Mention the first foreign religion to be introduced in Uganda.
38. Either: Write down any one good decision a Christian pupil can make while at school.
Or: Write down any one good decision that can be made by a Muslim pupil while at school.

39. Either: Who is referred to as "the prince of peace" according to Christianity?

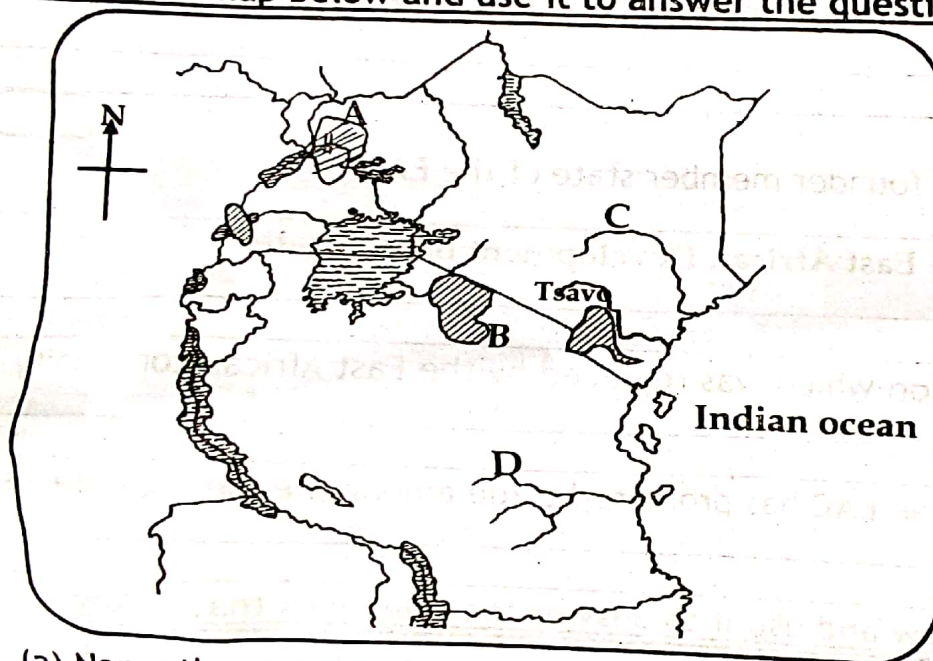
Or: Who is regarded as "the seal of prophets" according to Islam?

40. Either: Why did Cain kill his brother Abel?

Or: Why did Qabel kill his brother Habeel?

Section B (60 Marks)

41. Study the map below and use it to answer the questions that follow.



(a) Name the game park marked B.

(b) Why does river marked C flow towards the Indian ocean?

(c) Mention the waterfalls found in game park marked A.

(d) Name the river marked D.

42. (a) Apart from Uganda, mention one other East African country in which IBEACO carried out its work.

(b) State any one reason why the IBEACO was formed.

(c) Why did the IBEACO run bankrupt?

(d) How was Capt. Frederick Lugard related to the IBEACO?

43. (a) Name the first European explorer to come to East Africa.

(b) State the main reason for the coming of the European explorers to East Africa.

(c) Give any one reason why most European explorers to the interior of East Africa entered through Bagamoyo.

(d) In which way did the work of the explorers lead to colonisation of Africa?

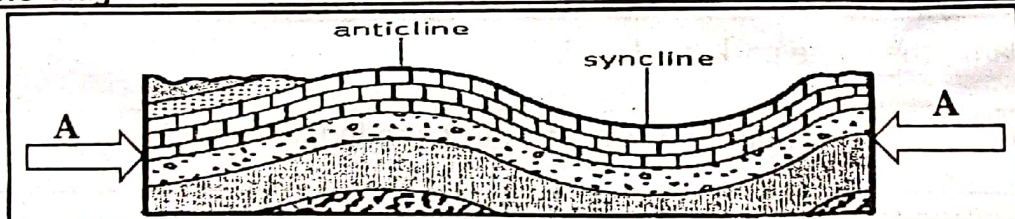
44. (a) Write down any one founder member state of the EAC.

(b) In which town is the East African Development Bank located?

(c) Name the organisation which was replaced by the East African community.

(d) State any one way the EAC has promoted trade among the member states.

45. Study the diagram below and use it to answer the questions that follow.



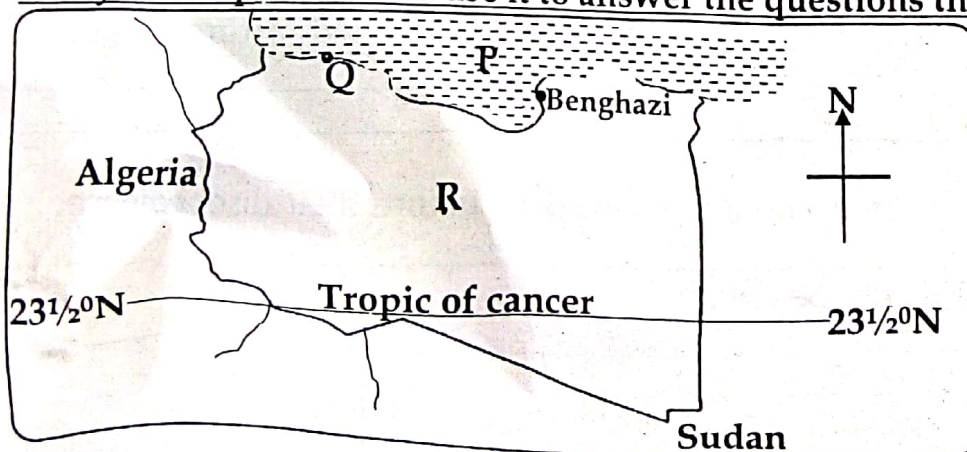
(a) Which process of mountain formation is shown in the above diagram?

(b) Name any one mountain in Africa which was formed through the process shown in the above diagram.

(c) State any one social importance of hills and mountains.

(d) Name the forces marked A in the diagram above.

46. (a) Apart from **climate**, mention any **two** other factors that influence vegetation distribution.
- (i) _____
- (ii) _____
- (b) How does climate affect vegetation distribution in an area?
- _____
- (c) Why do most trees in desert areas have very thin leaves and thick barks?
- _____
47. (a) Mention any **one** way leaders are chosen in your community.
- _____
- (b) To which type of leaders do the following belong?
- (i) Kings and Chiefs : _____
- (ii) Resident District Commissioner : _____
- (c) State any **one** way leaders promote peace in the society.
- _____
48. (a) Name the coastal town from which the construction of the Uganda railway was started.
- _____
- (b) Why was the Kenya-Uganda railway called the Uganda railway?
- _____
- (c) What role did Colonel Patterson play during the construction of the Uganda railway?
- _____
- (d) How did the building of the Uganda railway help to end slave trade in East Africa?
- _____
49. **Study the map below and use it to answer the questions that follow.**



(a) Name the water body marked P.

(b) Why do most people live in the Northern part of country R?

(c) Name the sea port marked Q.

(d) Why does country R export the largest volume of oil in Africa?

50. (a) Which stanza of the Uganda national anthem describes the fertile soils and good climate of Uganda?

(b) Name the national hero who composed the Uganda national anthem.

(c) How do Ugandans show respect to the nation when the national anthem is being sung?

(d) Apart from the Uganda national anthem, write down one other symbol of Uganda as a nation.

For each of the questions 51 to 55, answer Either Christianity or Islamic questions but not both.

51. Either:

(a) Name the place where Adam and Eve lived before their disobedience.

(b) How was the serpent punished for causing man to disobey God?

(c) Mention any one creature God created on the sixth day.

(d) How was the lost relationship between God and mankind restored?

Or:

(a) Name the place where Adam and Hawa lived before their disobedience.

(b) How did Angel Iblis disobey Allah?

(c) Mention any one creature Allah created on the sixth day.

(d) Why do Muslims have their Juma prayers on Friday?

52. Either:

(a) Which symbol of the Holy spirit appeared during the baptism of Jesus?

(b) Write down any one fruit of the Holy spirit.

(c) State any one way the Holy spirit is important to Christians.

(d) How is the day of Pentecost important in Christianity?

Or:

(a) In which month of the Islamic calendar is Hajj performed?

(b) Mention any one place Muslims visit during Hajj.

(c) State any one reason why Muslims perform Hajj.

(d) Give any one way Hajj is different from Umra.

53. Either:

(a) Name any one Prophet in the old Testament who foretold the coming of Jesus.

(b) Why was Jesus taken to Egypt?

(c) Mention any one gift the three wise men presented to Jesus.

(d) Give any one lesson a Christian pupil learns from Jesus as a child.

Or:

(a) Name the town where Prophet Muhammad was buried.

(b) Why did Prophet Muhammad migrate to the above town?

(c) Mention the immediate successor of Prophet Muhammad after his death.

(d) Give any one lesson a Muslim pupil learns from prophet Muhammad as a leader.

54. Either:

(a) Why is the Bible regarded as a holy book?

(b) Which section of the Bible contains the gospel?

(c) Give any one way Christians show respect to the Bible.

(d) Apart from the Bible, write down any one other symbol of Christianity.

Or: (a) Why is the Quran regarded as a holy book?

(b) Which angel revealed the holy Quran to Prophet Muhammad?

(c) State one way Muslims show respect to the holy Quran.

(d) Apart from the Quran, write down any one other symbol of Islam.

55. Either: Match the information in list A to that given in list B correctly.

List A

List B

- (a) Noah
- (b) Abraham
- (c) Saul
- (d) Joseph

First king of Israel.
Was sold to the Egyptian traders.
Built an ark.
Father of Isaac.

- (a) Noah : _____
- (b) Abraham : _____
- (c) Saul : _____
- (d) Joseph : _____

Or: Match the information in list A with that given in list B correctly.

List A

List B

- (a) Prophet Nuhu
- (b) Ibrahim
- (c) Zaid
- (d) Yusuf

First Muslim convert among the slaves.
Was sold to traders from Misri.
Built an ark.
Father of Ismail.

- (a) Prophet Nuhu : _____
- (b) Ibrahim : _____
- (c) Zaid : _____
- (d) Yusuf : _____



Hidden Tip For Excellence in SST and R.E

Strive to understand the concepts studied. You can't memorise everything. An examination is asking for your understanding of what you studied, it is not a memory test.